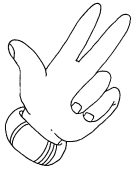
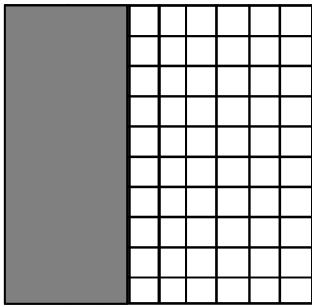


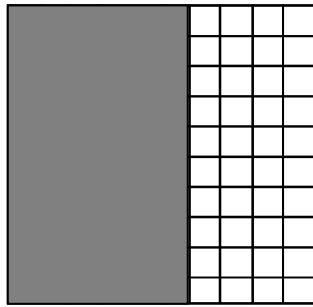
QUINTA UNITÀ DI ESERCITAZIONE.



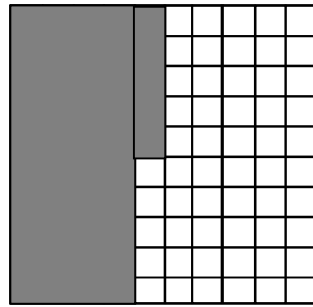
Completa la tabella, come nell'esempio, usando i quadrati:



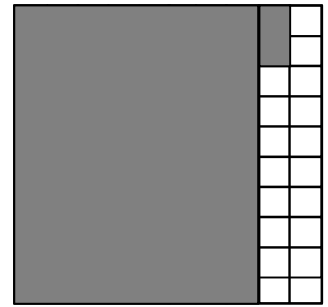
A



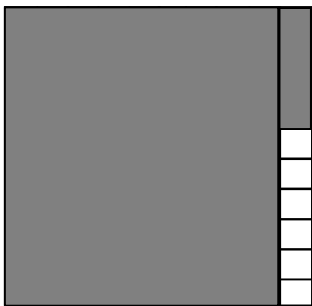
B



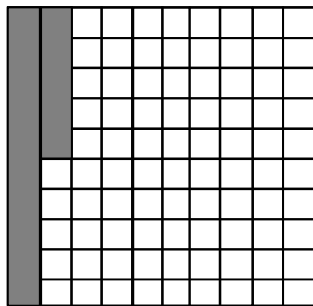
C



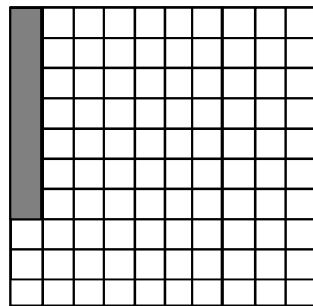
D



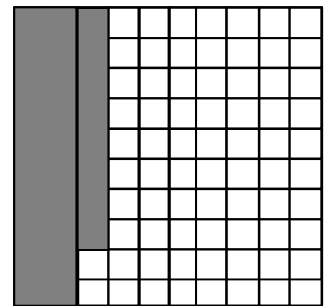
E



F



G

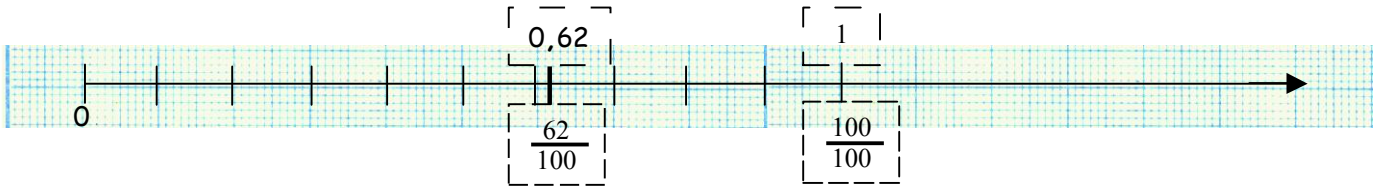


H

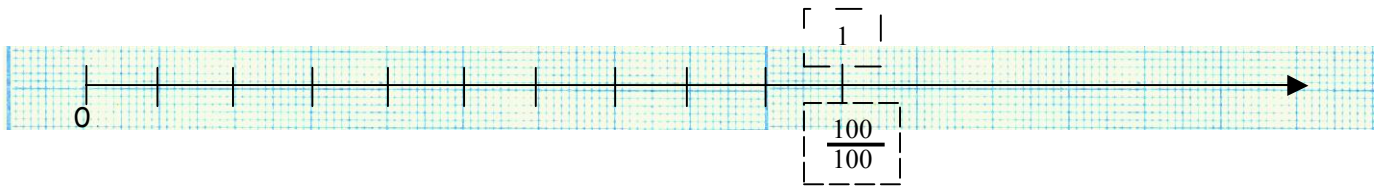
	In lettere	frazione	u	d	c	Numero decimale
A	quaranta centesimi	$\frac{40}{100}$	0	4	0	0,40
B						
C						
D						
E						
F						
G						
H						



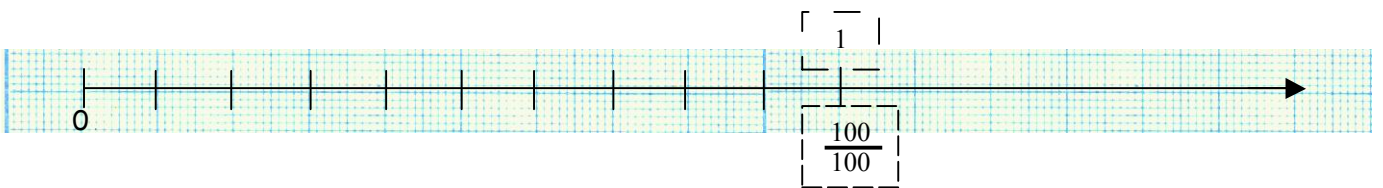
Colloca le frazioni o i numeri decimali sulla linea dei numeri, come l'esempio:



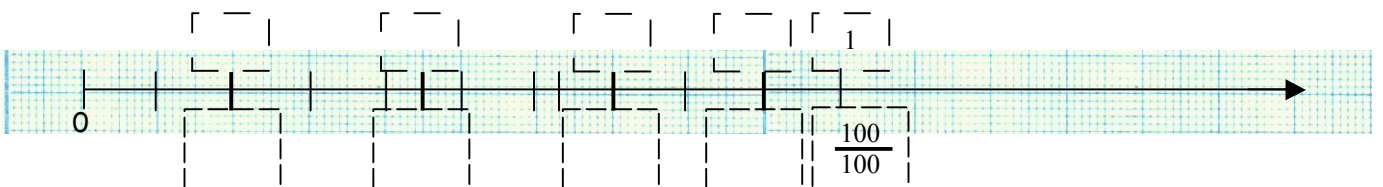
$$\frac{62}{100} \quad \frac{7}{100} \quad \frac{32}{100} \quad \frac{87}{100} \quad \frac{94}{100}$$



$$\frac{38}{100} \quad \frac{75}{100} \quad \frac{45}{100} \quad \frac{30}{100} \quad \frac{50}{100}$$



$$0,77 \quad 0,25 \quad 0,86 \quad 0,11 \quad 0,97$$






Pensi di aver svolto bene il compito:



Sì



Non so



No

