



LA CASA DEL 1000

- Osserva la legenda e completa:

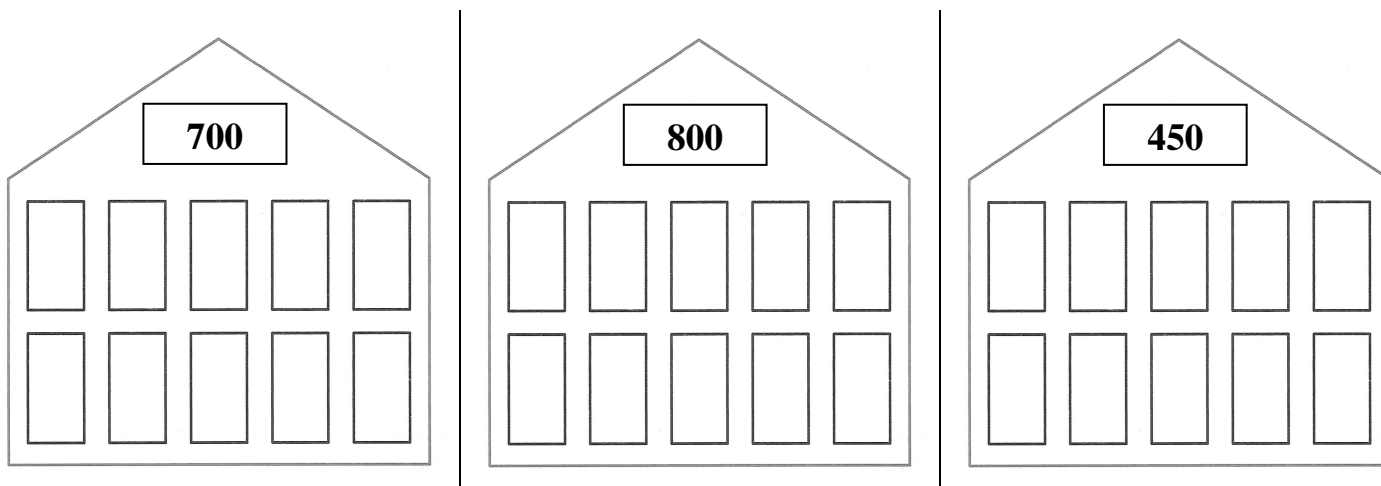
 → $1 \text{ h} = 10 \text{ da} = 100 \text{ u} = 100$

 → $5 \text{ da} = 50 \text{ u} = 50$

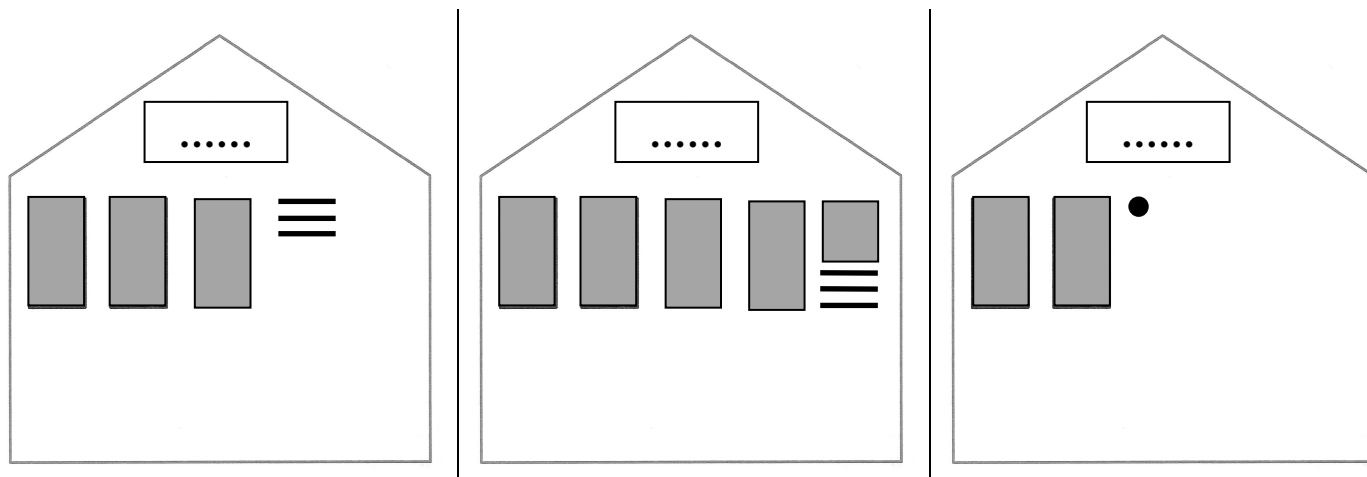
 → $1 \text{ da} = 10 \text{ u} = 10$

 → $1 \text{ u} = 1$

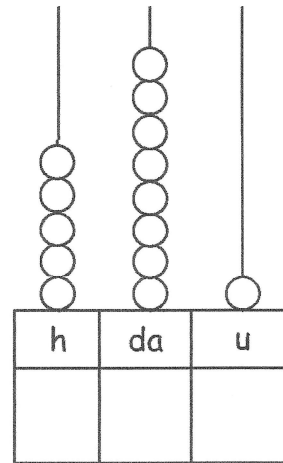
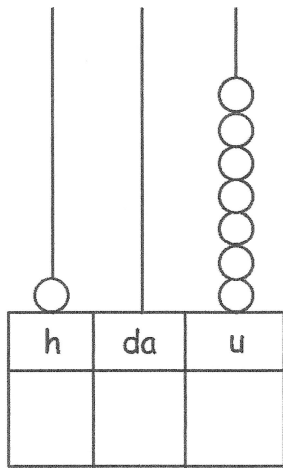
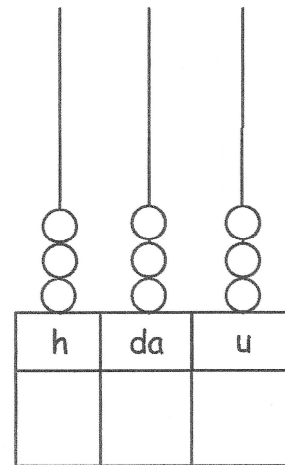
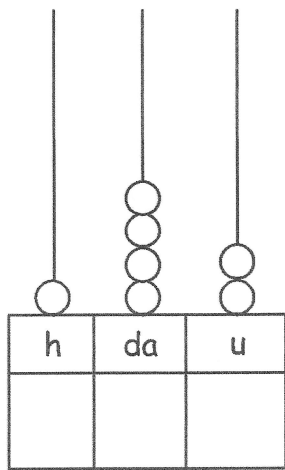
1. Colora



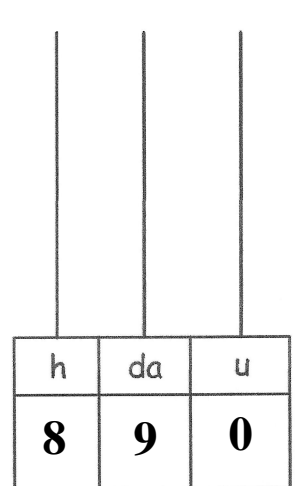
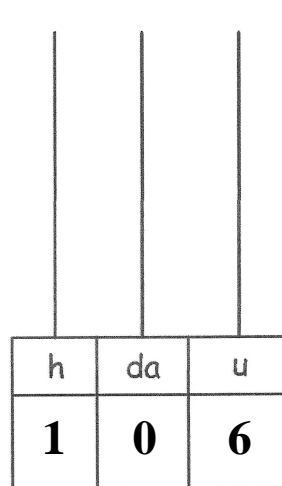
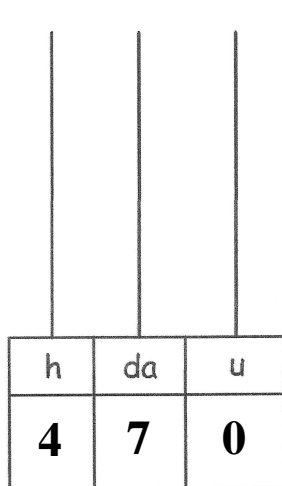
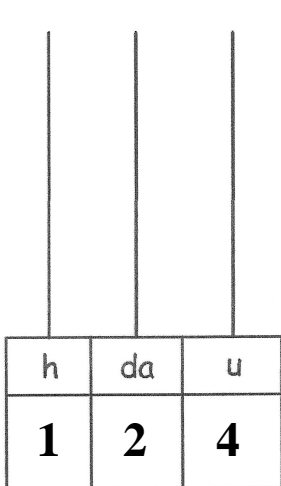
2. Scrivi il numero



3. Scrivi in cifre e in parola i numeri rappresentati su ogni abaco.



4. Disegna le palline mancanti su ogni abaco.



5. Scrivi i numeri formati da:

2 h =

2 h, 4 da, 7 u =

5 h, 8 da =

4 h, 5 da, 6 u =

10 da =

1 h, 4 u =

5 h, 5 u =

1 h, 4 u, 8 da =

9 h, 9 da, 9 u =

9 da, 3 h, 7 u =

6. Scrivi il numero precedente ed il numero successivo.

	98	
	155	
	378	
	343	
	160	

	120	
	237	
	481	
	693	
	205	

7. Completa con il segno >, <; =.

333		330
400		390
87		787
800		800
238		283

495		459
55		505
881		881
519		591
909		909

8. Scrivi i numeri in ordine crescente.

494 – 348 – 200 – 67 – 888 – 559 – 216 – 30 – 288 – 206

.....

9. Scrivi i numeri in ordine decrescente.

383 – 447 – 50 – 220 – 539 – 1000 – 292 – 671 – 666 – 207

.....

10. Scomponi in h, da e u.

134 =

769 =

351 =

570 =

209 =

899 =

736 =

109 =

800 =

96 =

