
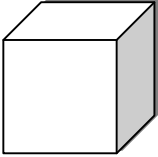





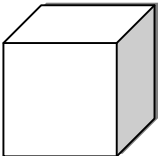




PRIMA UNITÀ DI ESERCITAZIONE.



Osservando i Blocchi Aritmetici Multibase (B.A.M.), prima esegui la scomposizione in cifre usando la tabella e poi scrivi il numero in lettere:

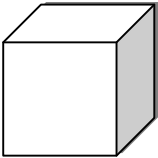
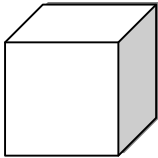
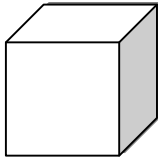
LEGENDA:

			
K	h	da	u

				
---	---	---	---	---

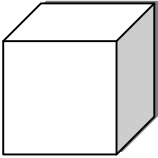










K	h	da	u
1	1	1	2

millecentododici

		
---	---	---

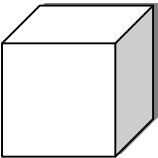




K	h	da	u

.....

										
---	---	---	---	---	---	---	---	---	---	---

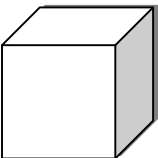
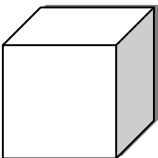








K	h	da	u

.....

				
--	---	---	---	---

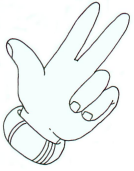
K	h	da	u

.....

									
--	---	---	---	---	---	---	---	---	---

K	h	da	u

.....



Completa la tabella:

Precedente che termina con zero	Precedente	Numero	Successivo	Seguente che termina con zero
2060	2069	2070	2071	2080
		3426		
		4309		
		6004		
		5999		
		1876		



Pensi di aver svolto bene il compito:



Sì



Non so



No